
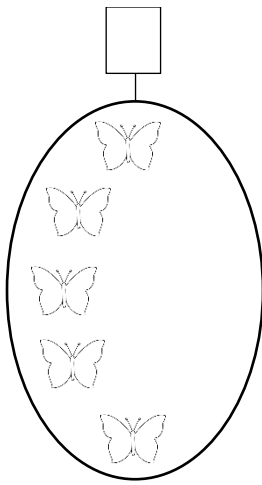



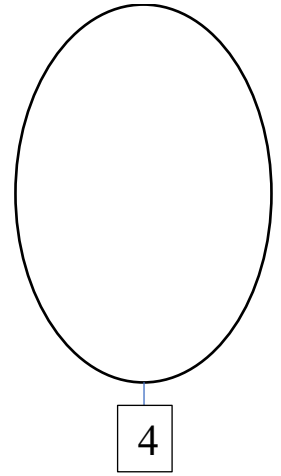





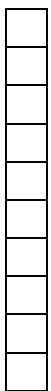
ЕДИНИЦИ, ДЕСЕТКИ – ЕДНОЦИФРЕНИ И ДВОЦИФРЕНИ
БРОЕВИ

Дополни за да биде точно!

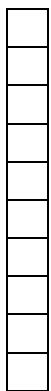


<https://odnasatacilnica.com/>

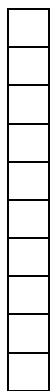
Обој онолку квадратчиња колку што е означено со цифрата!



3



9




6



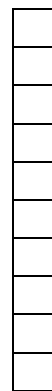
1




8




0



5



4



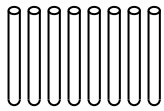
2



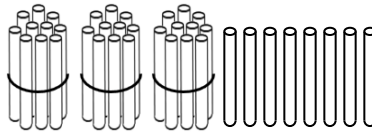
7

Запиши колку десетки и колку единици има во секој од броевите!

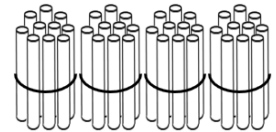
Д	Е



Д	Е



Д	Е



Нацртај и запиши колку единици има во секој од броевите!

$$10E + 5E = 15E$$

$$20E + 1E = 21E$$

$$30E + 3E = 33E$$

<https://odnasataucilnica.com>

Нацртај колку десетки можеш да направиш од дадените единици во полето и колку единици ќе останат од кои не можеш да формираш десетка?

Колку единици има во броевите:

+Колку десетки и единици има во броевите:

$1Д 4Е = _ E$

$4Д 1Е = _ E$

$5Е = _ Д _ E$

$19Е = _ Д _ E$

$6Д 8Е = _ E$

$9Д 0Е = _ E$

$77Е = _ Д _ E$

$80Е = _ Д _ E$