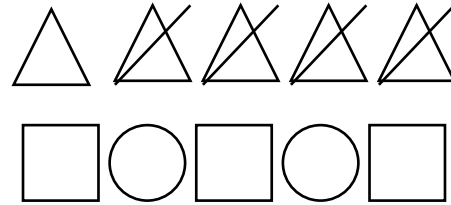
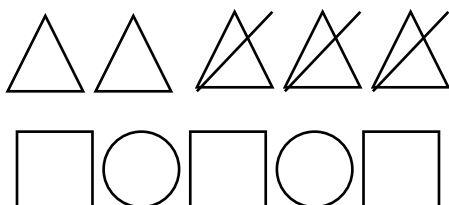
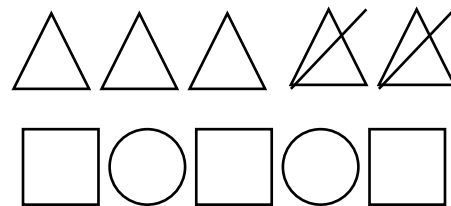

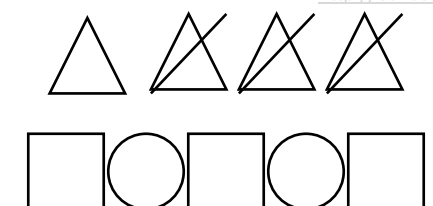

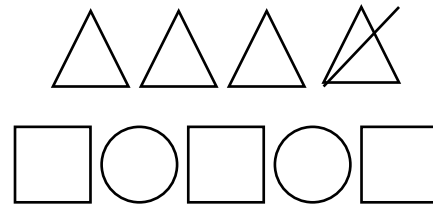

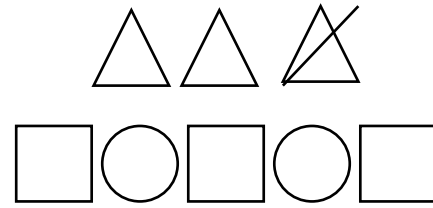



### ОДЗЕМАЊЕ ВО ОБЕМ НА БРОЈОТ 5

Во круговите напиши го знакот - или =, а во квадратите цифри од 1 до 5 според бројот на триаголници.



$2 - 1 = \square$

$5 - 1 = \square$

$5 - 2 = \square$

$3 - 1 = \square$

$3 - 2 = \square$

$4 - 3 = \square$

$4 - 1 = \square$

$4 - 2 = \square$

$5 - 3 = \square$

$5 - 4 = \square$