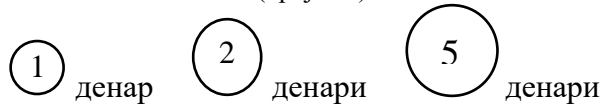



# Монети од 1, 2 и 5 денари

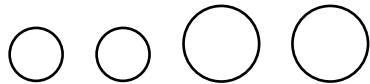
(бројот 6)



$$\square + \square + \square + \square + \square + \square = \square$$




$$\square + \square + \square + \square + \square = \square$$

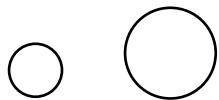


$$\square + \square + \square + \square = \square$$

<http://odnasataucilnica.com/>



$$\square + \square + \square = \square$$



$$\square + \square = \square$$




$$\square + \square + \square + \square + \square = \square$$

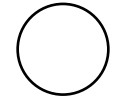
<http://odnasataucilnica.com>



$$\square + \square + \square + \square = \square$$




$$\square + \square + \square = \square$$




$$\square + \square = \square$$



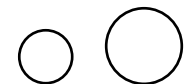
$$\square + \square + \square + \square = \square$$



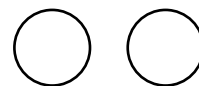
$$\square + \square + \square = \square$$



$$\square + \square + \square = \square$$



$$\square + \square = \square$$



$$\square + \square = \square$$



$$\square + \square = \square$$