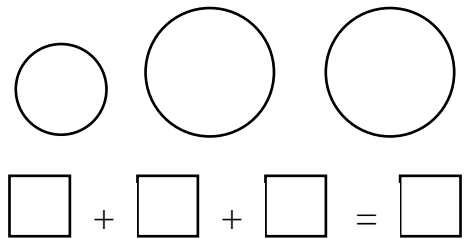
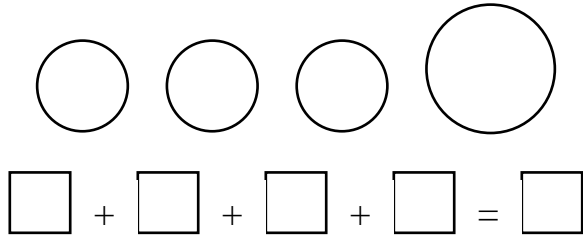
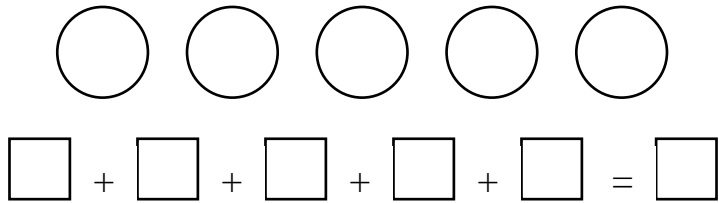
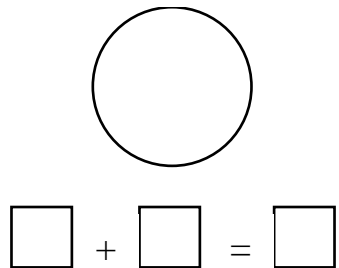


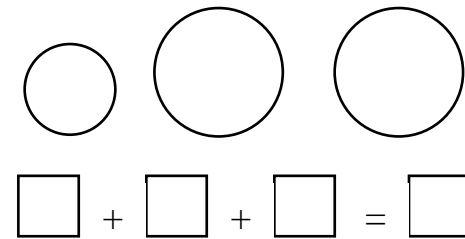
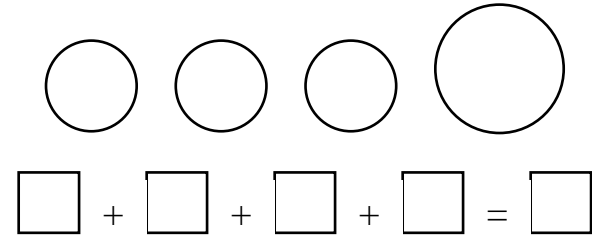
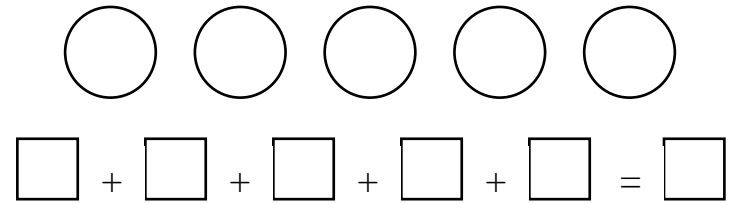
Монети од 1, 2 и 5 денари



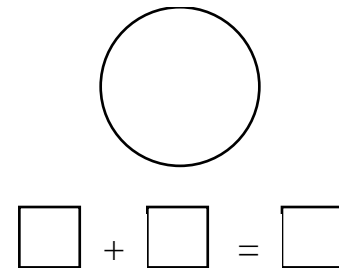
<http://odnasatacilnica.com/>



Монети од 1, 2 и 5 денари




<http://odnasatacilnica.com/>






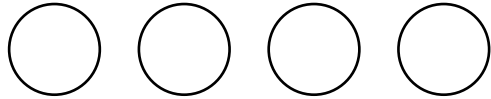
денар



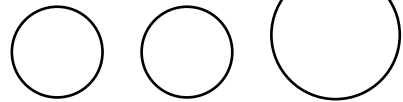
денари



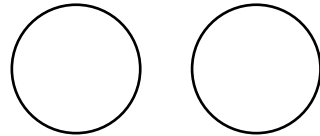
денари



$$\square + \square + \square + \square = \square$$




$$\square + \square + \square = \square$$

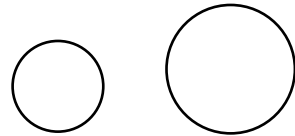


$$\square + \square = \square$$

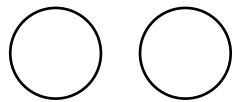
<http://odnasatacilnica.com/>



$$\square + \square + \square = \square$$




$$\square + \square = \square$$




$$\square + \square = \square$$


име и презиме _____



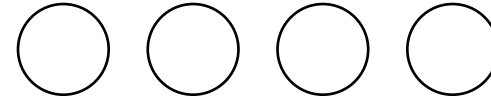
денар




денари



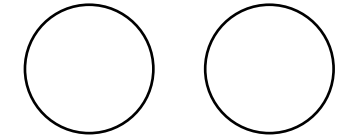
денари



$$\square + \square + \square + \square = \square$$

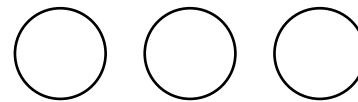


$$\square + \square + \square = \square$$

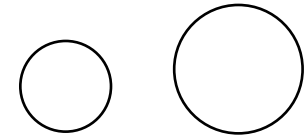


$$\square + \square = \square$$

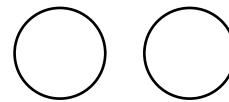
<http://odnasatacilnica.com/>



$$\square + \square + \square = \square$$



$$\square + \square = \square$$



$$\square + \square = \square$$

име и презиме _____