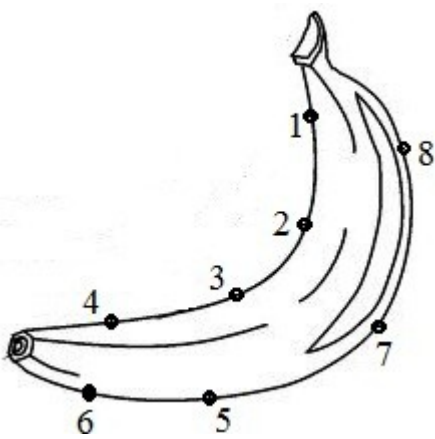
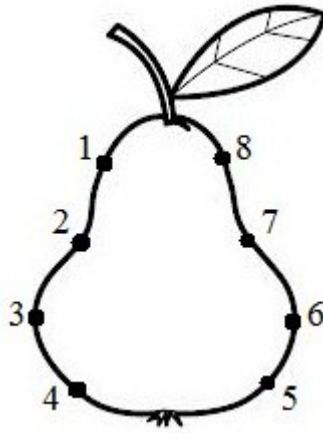


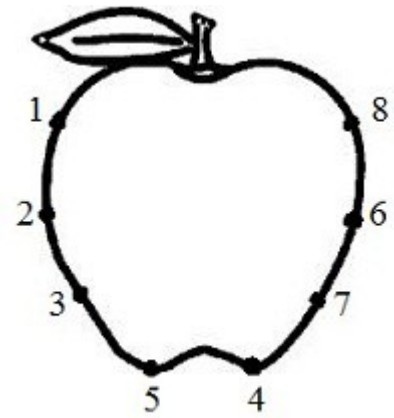
Која слика можеме да ја нацртаме ако при цртањето броиме од 1 до 8?



А


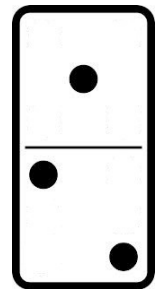
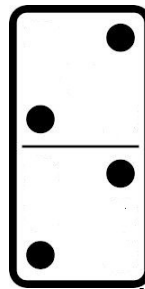
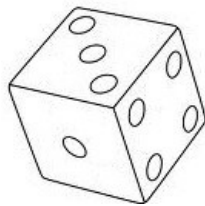



Б


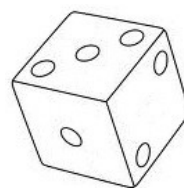


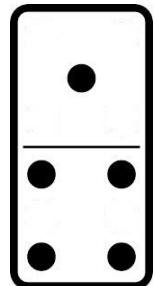


В

Поврзи со линија!



1	2	3
8		4
7	6	5



Обој го знакот $>$, $=$ или $<$, за равенството да биде точно!

$$2 \begin{matrix} > \\ = \\ < \end{matrix} 7$$

$$8 \begin{matrix} > \\ = \\ < \end{matrix} 5$$

$$4 \begin{matrix} > \\ = \\ < \end{matrix} 3$$

$$4 \begin{matrix} > \\ = \\ < \end{matrix} 5$$

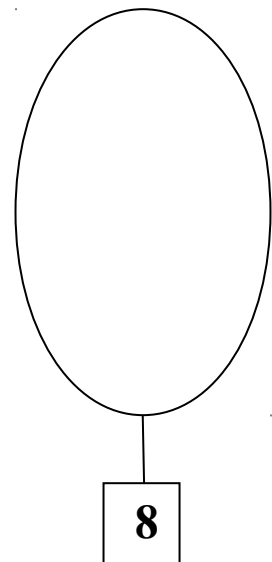

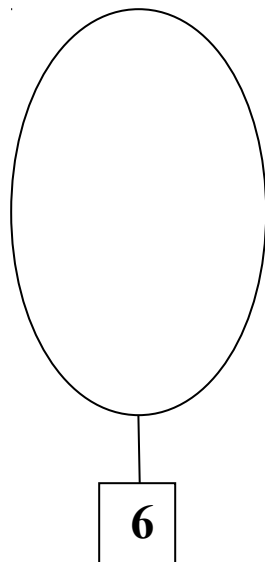
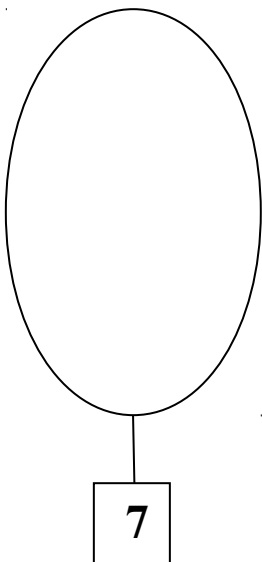
$$8 \begin{matrix} > \\ = \\ < \end{matrix} 1$$

$$7 \begin{matrix} > \\ = \\ < \end{matrix} 4$$

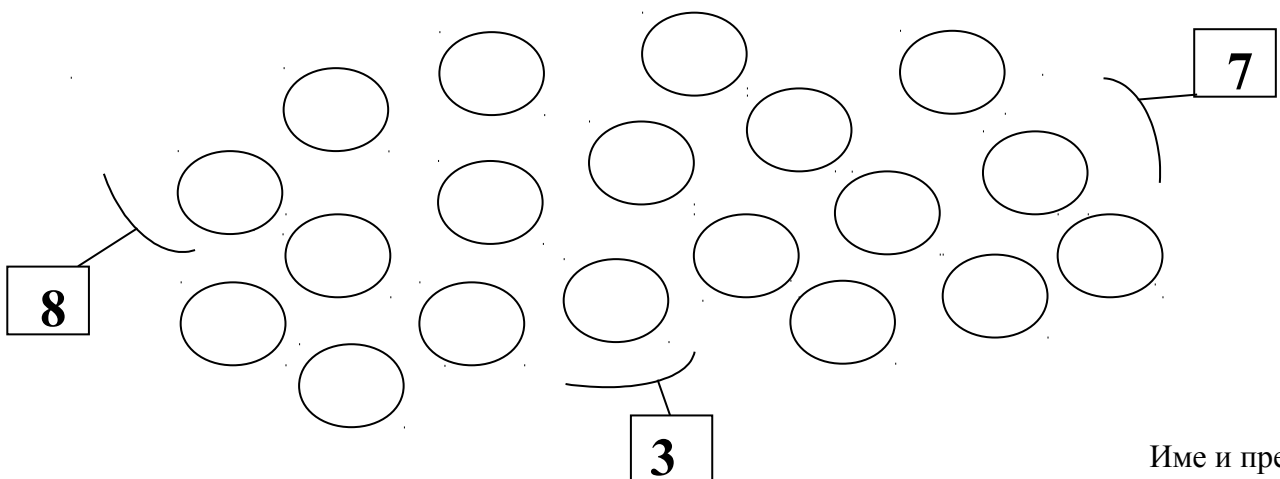
$$7 \begin{matrix} > \\ = \\ < \end{matrix} 7$$

$$3 \begin{matrix} > \\ = \\ < \end{matrix} 6$$

Нацртај елементи во множествата според бараниот број!



Формирај множества според бараниот број елементи!



Име и презиме _____